



Name \_\_\_\_\_

**Chapter  
13**

**Test Review B**

1. Circle all of the rectangles.



---

2. Circle all of the names that apply.



Square Rhombus Rectangle Parallelogram Trapezoid



Square Rhombus Rectangle Parallelogram Trapezoid

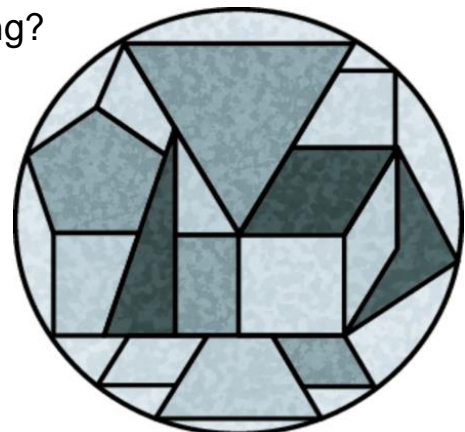


Square Rhombus Rectangle Parallelogram Trapezoid

---

3. How many rectangles are in the painting?

**Mark them with an X.**

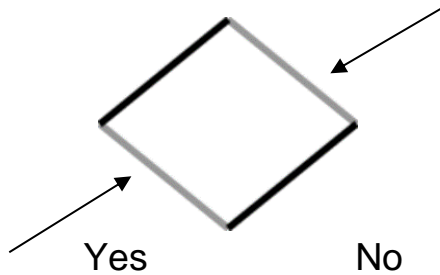


Name \_\_\_\_\_

**Chapter  
13**



**Test Review B (continued)**

4. Your friend says the gray sides are parallel. Is your friend correct?



---

5. Circle the quadrilaterals that are not trapezoids. Cross out the trapezoids.



---

6. Sort the earrings into two groups by shape. Label the groups.



What name can you use to classify all the earring shapes?

---

7. There are 6 rows of 5 squares in a floor tile pattern. Find the total number of right angles in the pattern. Draw it!