

**Chapter
14**

Test Review wksh B

1. Use the frequency table to complete the picture graph.

Favorite Animal	
Cat	12
Octopus	3
Butterfly	15

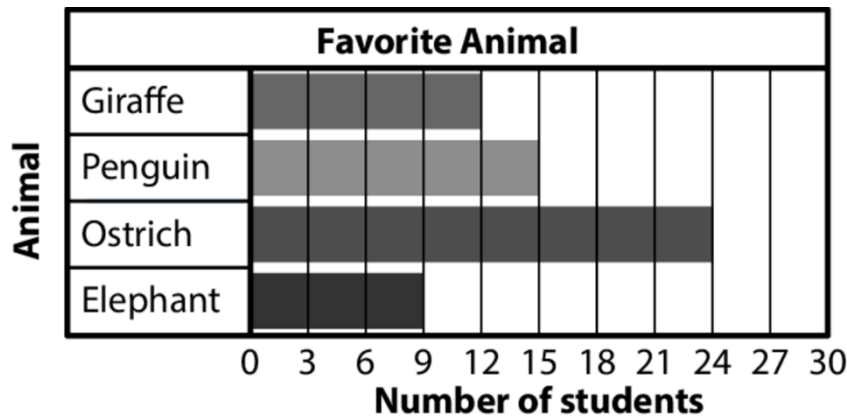
Favorite Animal	
Cat	
Octopus	
Butterfly	

Animal

Each 😊 = 3 students

2. How many more students chose cat or butterfly than octopus?

3. Nine more students choose octopus. How many more smiley faces do you need to draw?



4. How many more students chose ostrich than elephant?

5. How many fewer students chose penguin than elephant and giraffe combined?

6. How many students voted in all?

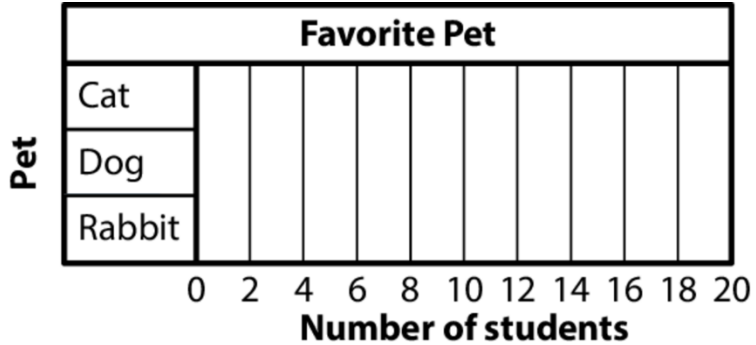
Name _____

**Chapter
14**

Test Review wksh B (continued)

7. Use the frequency table to complete the bar graph.

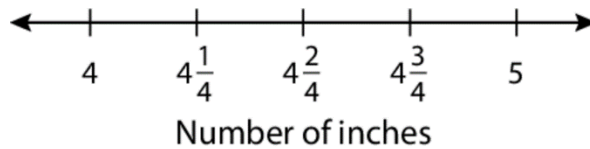
Favorite Pet	
Cat	19
Dog	7
Rabbit	9



8. Measure the length of each rectangle to the nearest *quarter inch*. Then record each length on the line plot.



Rectangle Lengths



9. Which quarter inch has the most rectangles?

10. If $\bigcirc \bigcirc \bigcirc = 15$ on a picture graph, then what value does \bigcirc represent?